

Trunte tryller med tabeller 1

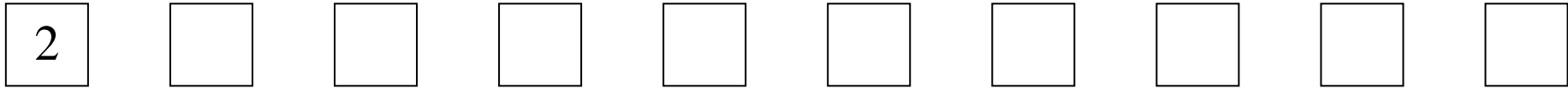
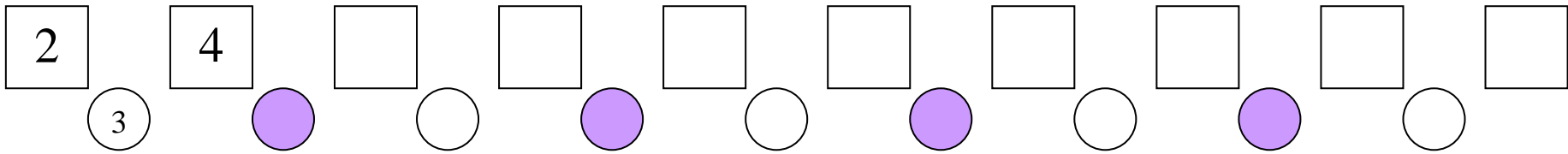


Kan du hjelpe mig med at finde de rigtige tabeller? Så kan du sikkert også klare nogle nemme gange stykker!



Video om hæftet

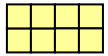





$2 * 5 =$



$2 * 4 =$




$2 * 2 =$

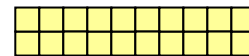
$2 * 10 =$



$2 * 8 =$



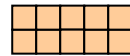
$2 * 9 =$



$2 * 3 =$



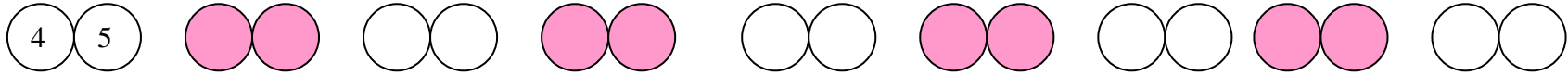
$2 * 7 =$



$2 * 6 =$



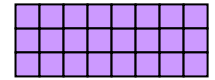
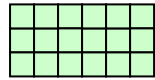
3	6								
---	---	--	--	--	--	--	--	--	--



3									
---	--	--	--	--	--	--	--	--	--

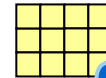
$$3 * 5 =$$

$$3 * 4 =$$

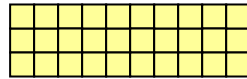


$$3 * 2 =$$

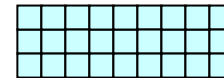
$$3 * 10 =$$



$$3 * 8 =$$



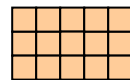
$$3 * 9 =$$



$$3 * 3 =$$

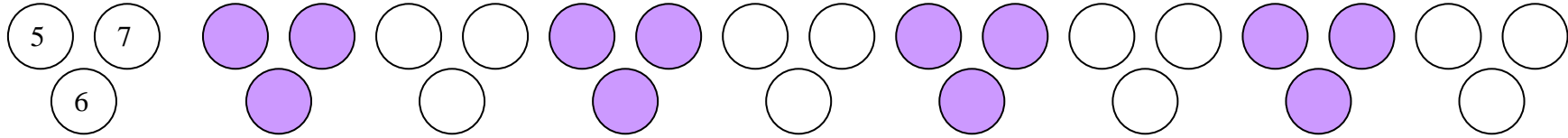


$$3 * 7 =$$




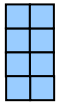
$$3 * 6 =$$

4	8								
---	---	--	--	--	--	--	--	--	--

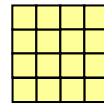


4									
---	--	--	--	--	--	--	--	--	--


$$4 * 5 =$$




$$4 * 9 =$$




$$4 * 8 =$$



$$4 * 7 =$$




$$4 * 4 =$$



$$4 * 2 =$$



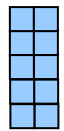
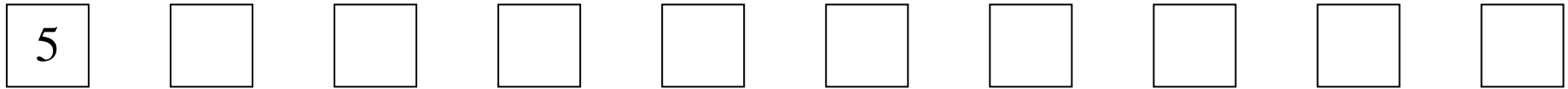
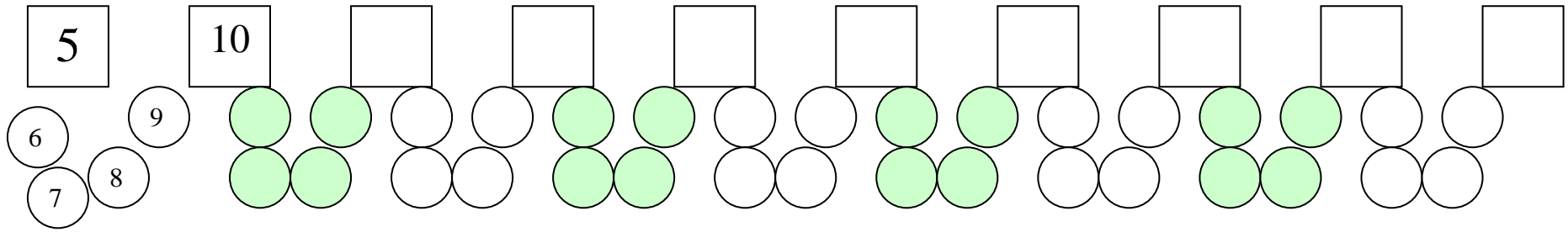
$$4 * 3 =$$




$$4 * 10 =$$



$$4 * 6 =$$




$$5 * 3 =$$




$$5 * 4 =$$

$$5 * 8 =$$




$$5 * 10 =$$

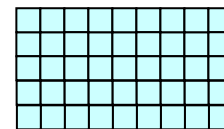


$$5 * 5 =$$


$$5 * 6 =$$



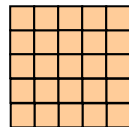
$$5 * 9 =$$



$$5 * 2 =$$



$$5 * 7 =$$



2	*	1	=				3	*	3	=	
1	*	5	=				1	*	2	=	
1	*	5	=				2	*	4	=	
1	*	1	=				5	*	2	=	
1	*	5	=				1	*	1	=	
5	*	5	=				3	*	5	=	
5	*	1	=				5	*	4	=	
2	*	3	=				4	*	3	=	
4	*	4	=				4	*	3	=	